



# 6-7 YEARS | WEEK 04

## Geography - India Concepts

---

1. About India

---

2. State emblem - Symbols

---

3. India & State emblem

---

4. Cross the odd one out - State names

---

5. Cross the odd one out - State names

---

6. Cross the odd one out - State names

---

7. Cross the odd one out - State names

---

8. Cross the odd one out - State names

---

9. Cross the odd one out - State names

---

10. Cross the odd one out - State names

---

11. India - Animals of the states

---

12. India - Languages

---

13. India - Mahatma Gandhi

---

14. India map & State names

---

15. India map and State names

---

16. India's State maps

---

17. India's State maps

---

18. India's State and Union Territories map

---

19. India - Neighbouring countries

---

20. India - Gateway of India



# ABOUT INDIA

- WHICH IS THE BIGGEST STATE IN INDIA BY AREA?
- WHICH ARE THE SMALLEST STATE IN INDIA BY AREA?
- WHICH ARE THE MAIN RIVERS OF INDIA?
- WHICH IS THE BIGGEST AIRPORT IN INDIA?
- WHICH IS THE SMALLEST AIRPORT IN INDIA?
- NAME OF THE INTERNATIONAL AIRPORT IN MUMBAI?
- NAME THE HIGHEST PEAK OF INDIA?
- NAME THE FLOWER SHAPED TEMPLE OF INDIA?
- NAME THE SUN INSPIRED TEMPLE OF INDIA?
- NAME THE MAIN CAVES OF INDIA?
- WHICH CITY IS KNOWN AS THE CITY OF ORANGES?
- WHERE DOES THE PRIME MINISTER OF INDIA HOIST FLAG ON THE INDEPENDENCE DAY?
- WHAT IS THE NAME OF THE NORTHERNMOST CITY OF INDIA?
- WHAT IS THE NAME OF THE SOUTHERNMOST CITY OF INDIA?



# STATE EMBLEM - Symbols

Directions:

1. Follow the instructions given below for each box and complete the task.
2. You can refer to and cut the state emblems from the reference sheets.

--	--	--	--

State Emblems that have integrated color blue in their design.

--	--	--	--

State Emblems that have integrated a tree in their design.

--	--	--	--

State Emblems that have integrated color green in their design.

--	--	--	--

State Emblems that have integrated color black in their design.

--	--	--	--

State Emblems that have mountain symbols.



# INDIA & STATE EMBLEM

MAKE THE CUT-OUTS AND USE THEM AS NECESSARY.



Emblem of India



Bihar



Haryana



Kerala



Shillong



Punjab



Telangana



West Bengal



Andhra Pradesh



Chhattisgarh



Himachal Pradesh



Madhya Pradesh



Mizoram



Rajasthan



Tripura



Delhi



Arunachal Pradesh



Goa



Jharkhand



Maharashtra



Nagaland



Sikkim



Uttar Pradesh



Jammu and Kashmir



Assam



Gujarat



Karnataka



Manipur



Odisha



Tamil Nadu



Uttarakhand




Chandigarh



# Cross the odd one out





Mini says the name of a state. She wants Kartar, Sam, Sally and Rahman to say the name of the capital of that state. Bholu has to find out who has said the correct name of the capital of the state. Help him by putting a tick (✓) mark on the picture of the person who has correctly said the name of the capital.



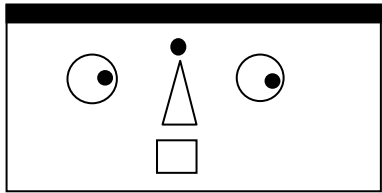

Rajasthan

Delhi





Jaipur

Srinagar



Mumbai

?






# Cross out the odd one





Sam says the name of a state. He wants Kartar, Bholu, Sally and Rahman to say the name of the capital of that state. Mini has to find out who has said the correct name of the capital of the state. Help her by putting a tick (✓) mark on the picture of the person who has correctly said the name of the capital.



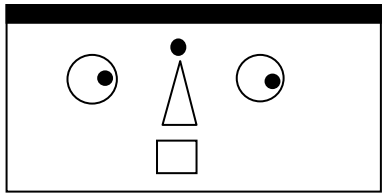

Maharashtra

Gandhinagar





Mumbai

Lucknow



Hyderabad

?






# Cross out the odd one





Kartar says the name of a state. He wants Mini, Sam, Sally and Rahman to say the name of the capital of that state. Bholu has to find out who has said the correct name of the capital of the state. Help him by putting a tick (✓) mark on the picture of the person who has correctly said the name of the capital.



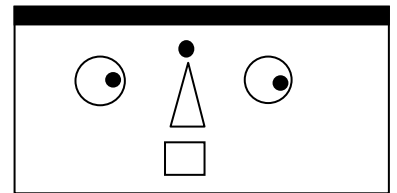

Gujarat

Dispur





Bengaluru

Gandhinagar



Patna

?






# Cross out the odd one





Rahman says the name of a state. He wants Kartar, Sam, Sally and Bholu to say the name of the capital of that state. Mini has to find out who has said the correct name of the capital of the state. Help her by putting a tick (✓) mark on the picture of the person who has correctly said the name of the capital.



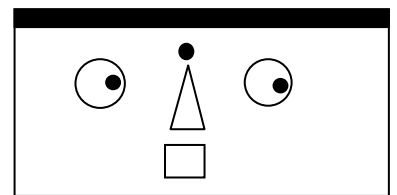

Assam

Bhopal





Patna

Dispur



Chandigarh

?






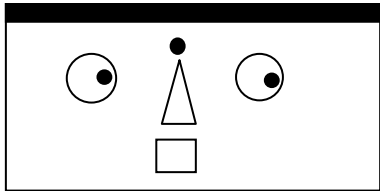
# Cross out the odd one




Sally says the name of a state. She wants Kartar, Sam, Bholu and Rahman to say the name of the capital of that state. Mini has to find out who has said the correct name of the capital of the state. Help her by putting a tick (✓) mark on the picture of the person who has correctly said the name of the capital.




Bihar




Gangtok




Hyderabad




Chennai



Patna



?






# Cross out the odd one





Bholu says the name of a state. He wants Kartar, Sam, Sally and Rahman to say the name of the capital of that state. Mini has to find out who has said the correct name of the capital of the state. Help her by putting a tick (✓) mark on the picture of the person who has correctly said the name of the capital.



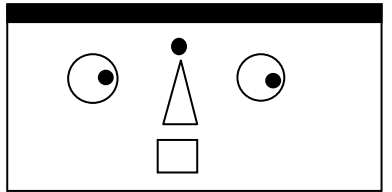

Uttar Pradesh

Kolkata





Dehradun

Shimla



Lucknow

?






# Cross out the odd one





Mini says the name of a state. She wants Kartar, Sam, Sally and Rahman to say the name of the capital of that state. Bholu has to find out who has said the correct name of the capital of the state. Help him by putting a tick (✓) mark on the picture of the person who has correctly said the name of the capital.



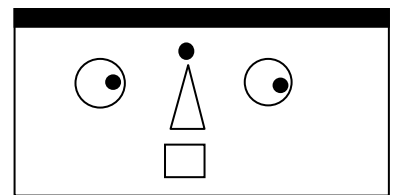

West Bengal

Shimla





Srinagar

Kolkata



Lucknow

?



# India: Animals of the states



Let's connect these animals to the states they represent. Take 4 different colour crayons or pencils for each animal and connect them to their respective states. One is done for your reference.



Asiatic lion  
(Gujarat)



One-horned rhinoceros  
(Assam)



Black-Buck  
(Andhra Pradesh)



Snow leopard  
(Himachal Pradesh)

# India: Languages - Word Search



Let's search for various Indian languages in the grid. You can search them horizontally, vertically or diagonally and colour them as per your choice.

q	w	x	c	x	t	s	g	h	t	h	j	j	s	g	s	f
u	h	i	n	d	i	i	f	g	b	e	n	g	a	l	i	s
r	a	d	x	a	b	h	h	n	f	h	h	j	h	j	k	d
g	o	o	d	a	v	n	j	k	w	a	o	l	d	g	e	d
d	f	w	j	s	d	d	s	n	j	p	a	j	r	f	s	d
f	d	n	d	a	v	n	x	m	s	a	s	r	p	t	c	v
a	u	q	w	e	R	t	y	a	d	s	t	f	s	u	i	c
p	a	s	d	f	g	h	j	r	d	d	a	s	d	a	r	a
a	s	t	a	m	i	l	k	a	s	f	m	s	f	w	z	i
q	a	e	d	h	n	e	n	t	j	s	x	y	j	k	n	m
a	s	l	f	g	g	f	m	h	d	k	a	n	n	a	d	a
z	x	e	w	d	a	d	f	i	d	s	h	f	r	k	z	a
v	t	g	d	a	v	n	x	m	s	a	s	r	p	t	c	j
u	s	u	v	b	n	m	k	g	g	u	j	r	a	t	i	y

Bengali
Bhojpuri
Gujarati


Tamil
Telegu
Punjabi

Hindi
Marathi
Kannada

# India: Mahatma Gandhi



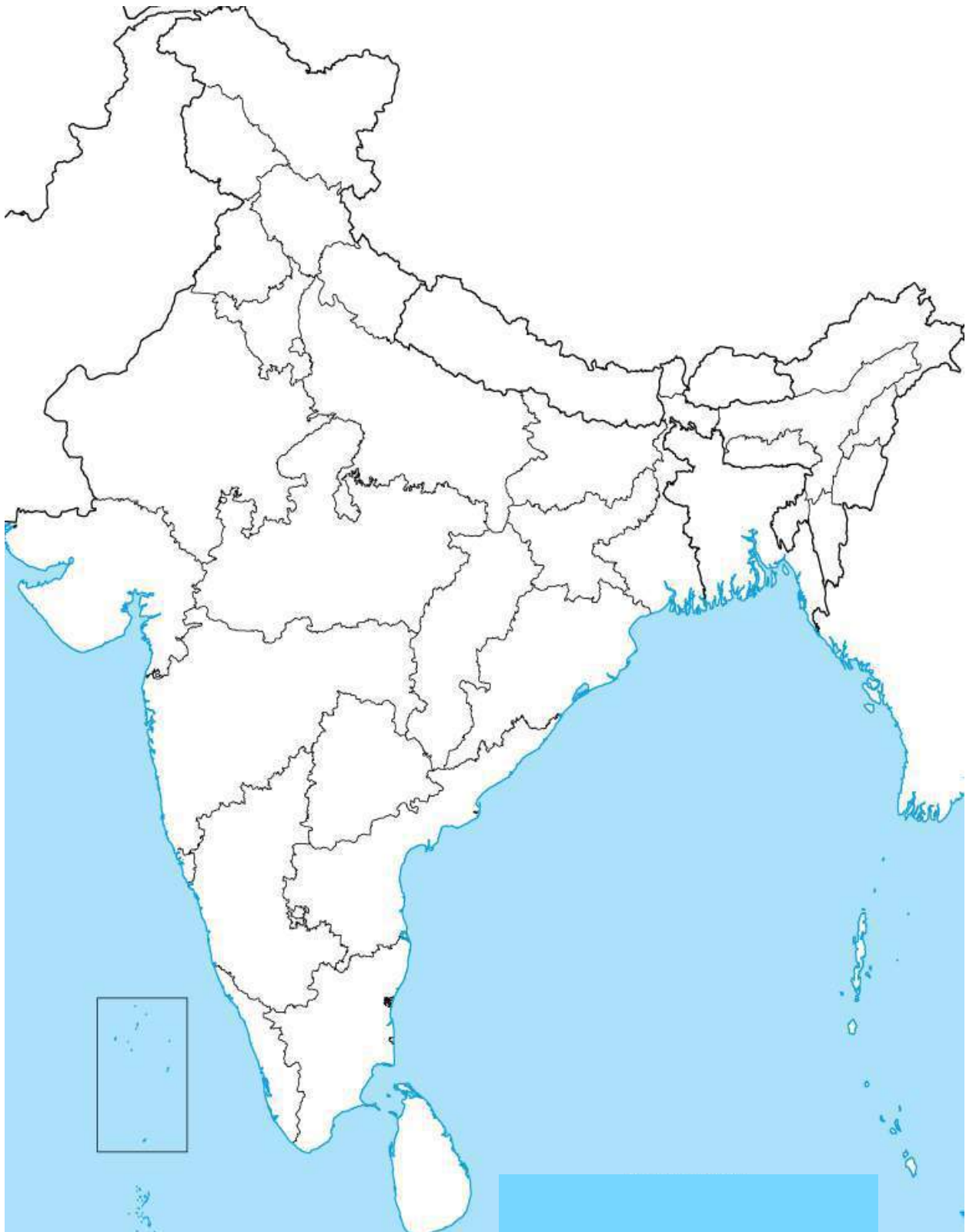
Mahatma Gandhi : Father of our Nation. Trace the light lines with pencil and colour his portrait.





# INDIA MAP & STATE NAMES

Write the names of the states & color them.





# INDIA MAP & STATE NAMES

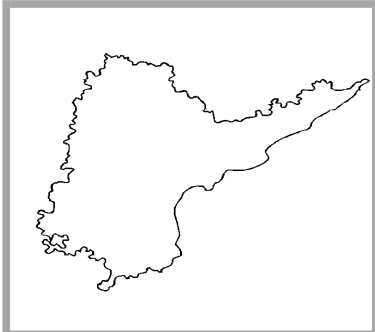


- AP : Arunachal Pradesh
- Cha : Chandigarh
- Chh : Chhattisgarh
- DD : Daman and Diu
- DN : Dadra and Nagar Haveli
- Ker : Kerala
- Man : Manipur
- Miz : Mizoram
- Nag : Nagaland
- Pon : Pondicherry
- Sik : Sikkim
- Tri : Tripura

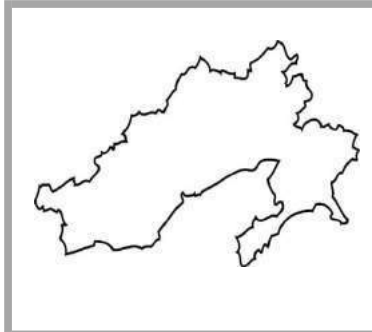


# INDIA'S STATE MAPS

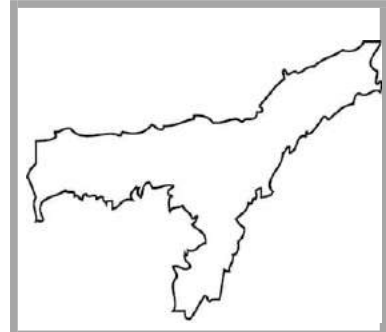
MAKE THE CUT-OUTS AND USE THEM AS NECESSARY.



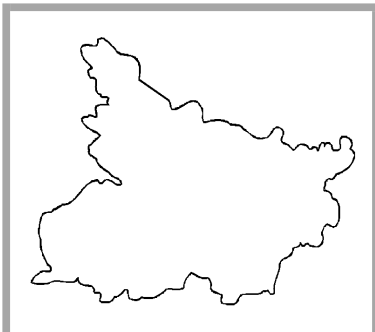
**Andhra Pradesh**



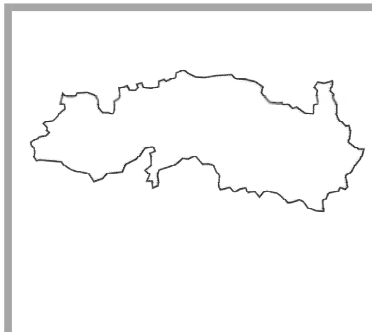
**Arunachal Pradesh**



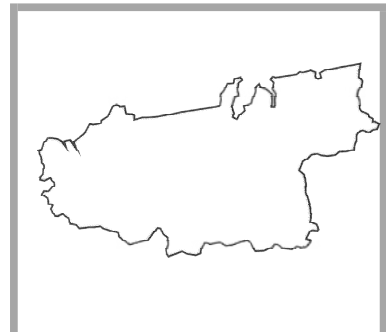
**Assam**



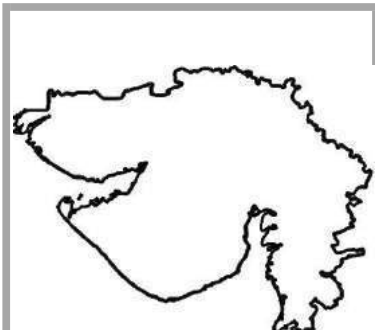
**Bihar**



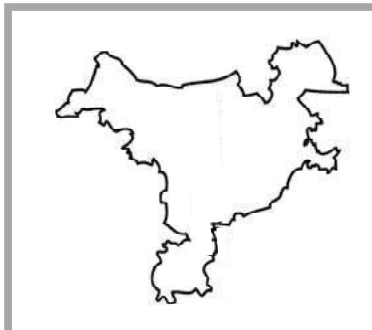
**Chhattisgarh**



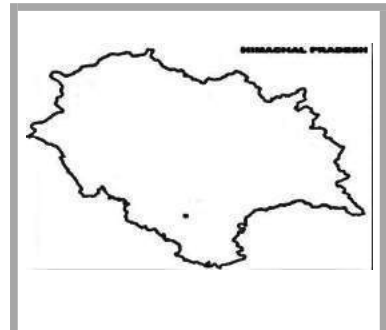
**Goa**



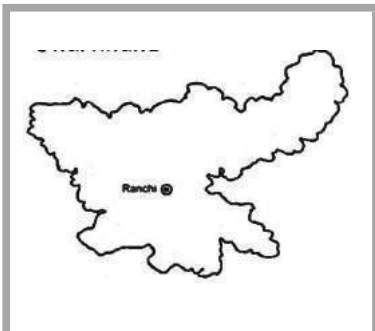
**Gujarat**



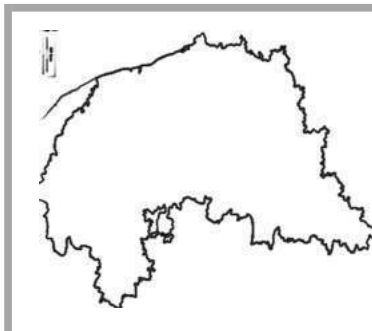
**Haryana**



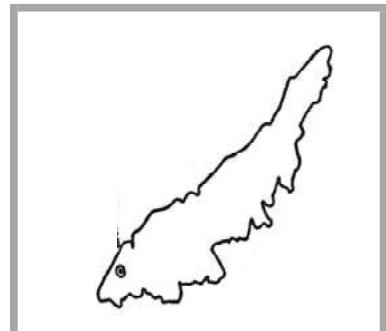
**Himachal Pradesh**



**Jharkhand**



**Karnataka**

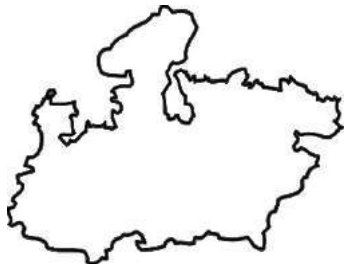


**Kerala**



# INDIA'S STATE MAPS

MAKE THE CUT-OUTS AND USE THEM AS NECESSARY.



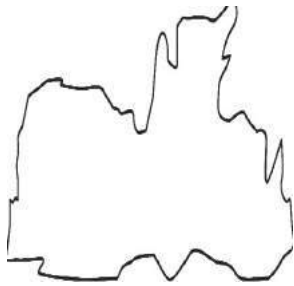
**Madhya Pradesh**



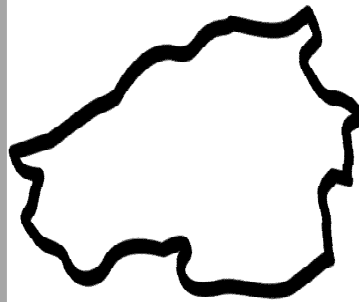
**Maharashtra**



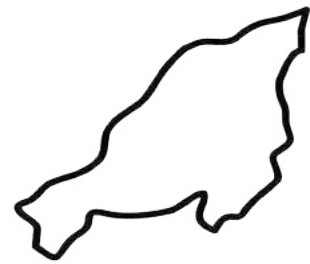
**Manipur**



**Meghalaya**



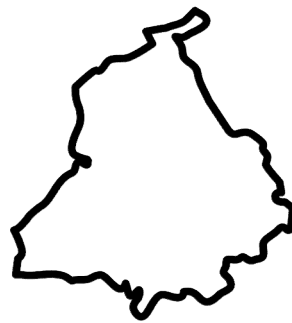
**Mizoram**



**Nagaland**




**Odisha**



**Punjab**



**Rajasthan**



**Sikkim**



**Tamil Nadu**



**Telangana**



# INDIA'S STATE AND UNION TERRITORIES MAPS

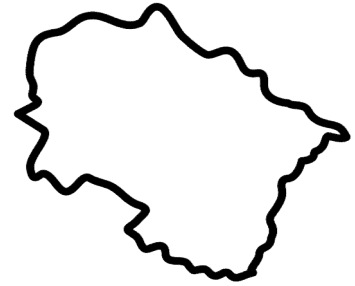
MAKE THE CUT-OUTS AND USE THEM AS NECESSARY.



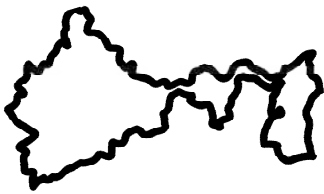
**Tripura**



**Uttar Pradesh**



**Uttarakhand**



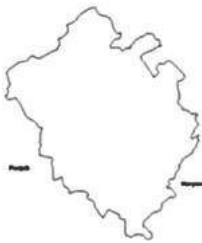
**West Bengal**



**Ladakh**




**Andaman and  
Nicobar Islands**



**Chandigarh**



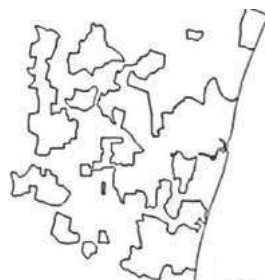
**Dadra & Nagar Haveli  
and Daman & Diu**



**Delhi**



**Jammu and Kashmir**



**Puducherry**



**Lakshadweep**

# India: Neighbouring countries



Let's know our neighbouring countries. Match our neighbour to its geographical location with respect to India.

India's northern neighbour



Bangladesh

India's southern neighbour



Pakistan

India's eastern neighbour



Nepal

India's western neighbour



Sri Lanka

# India: Gateway of India



Draw and paint the Gateway of India. Refer the picture for drawing.

