



7-8 YEARS | WEEK 58

Maths-Pattern

1. Numbers

2. Shapes

3. Different patterns

4. Number & numbers

5. Numbers (+ or -)

6. Missing numbers

7. What next?

8. Identify pattern

9. Pattern finding

10. Pattern finding

11. Geometrical patterns

12. Design

13. Write missing numbers

14. Wonderful patterns

15. Missing Numbers

16. Pattern finding

17. Find pattern

18. Pattern finding

19. Missing numbers

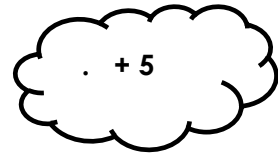
20. Missing numbers

Patterns : Numbers




Write the numbers in the pattern and then write the rule.


1.




2.




3.




4.




5.




6.




7.



8.



9.

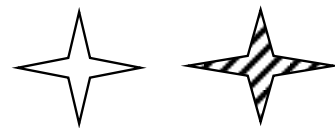

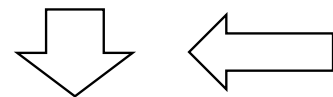
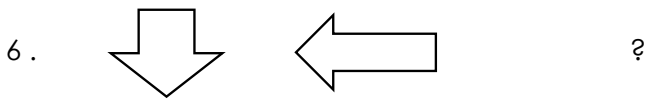
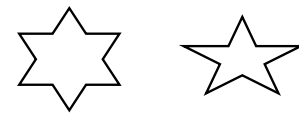
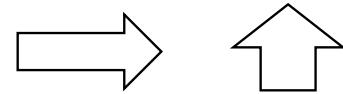
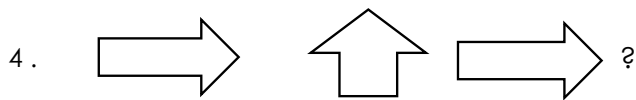
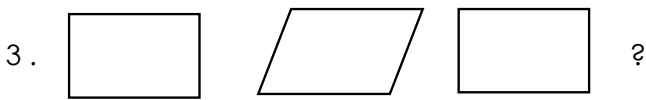
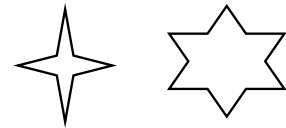

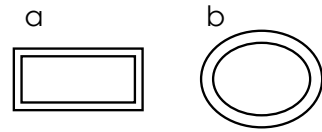
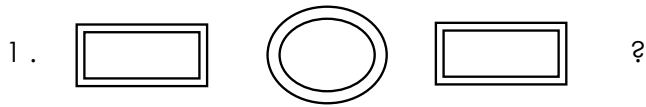


Answer Key: Follow the pattern and write the answers like 1) +5, 2) +3, 3) -3, 4) +5, 5) +2, 5 6) +10, 7) +7, 8) +10, 9) +11

Patterns : Shapes



Complete the patterns. Circle the shape that comes next in the sequence.



Answer Key: 1-b, 2-b, 3-a, 4-b, 5-b, 6-a, 7-b, 8-a

Access 12,000+ expert-designed worksheets

Subscribe Now!

[Explore All Math Worksheets](#)